




# Number Facts with Dominoes

$$2 + 4 =$$


$$\begin{array}{r} 5 \\ + 4 \\ \hline \end{array}$$

$$5 + 3 =$$


$$\begin{array}{r} 6 \\ + 2 \\ \hline \end{array}$$

$$1 + 3 =$$


$$\begin{array}{r} 3 \\ + 4 \\ \hline \end{array}$$